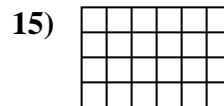
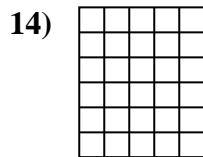
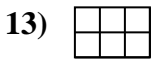
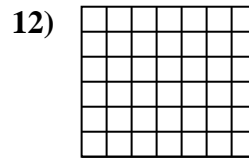
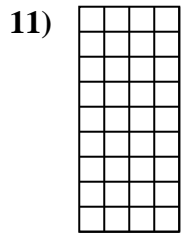
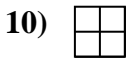

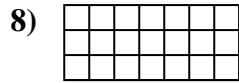
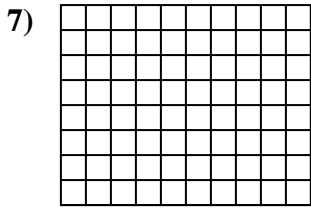
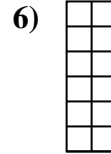
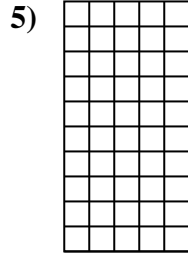

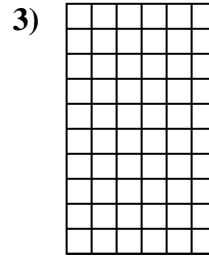
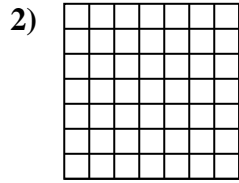
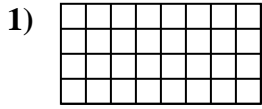




Determine the area. Each  $\square = 1$  square unit ( $u^2$ ).

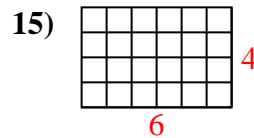
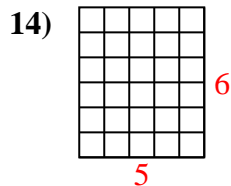
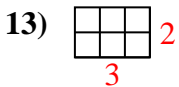
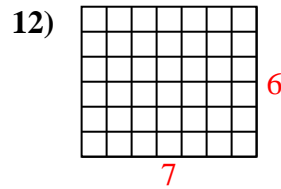
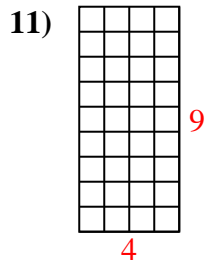
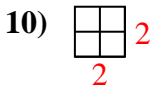
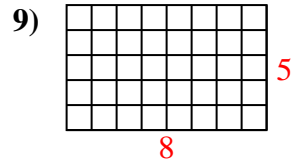
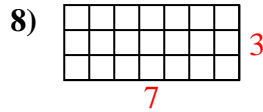
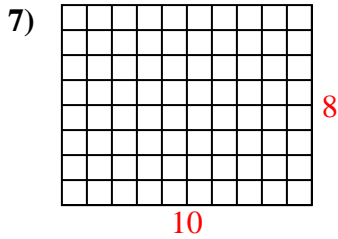
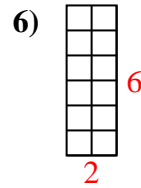
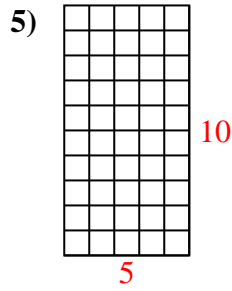
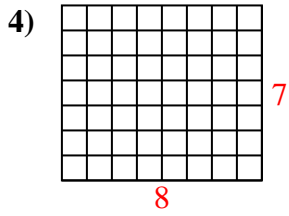
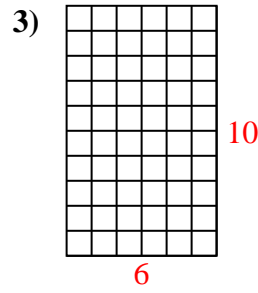
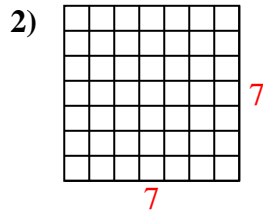
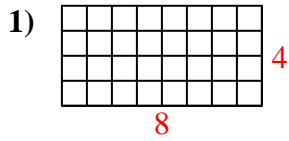


Answers

- 1. \_\_\_\_\_
- 2. \_\_\_\_\_
- 3. \_\_\_\_\_
- 4. \_\_\_\_\_
- 5. \_\_\_\_\_
- 6. \_\_\_\_\_
- 7. \_\_\_\_\_
- 8. \_\_\_\_\_
- 9. \_\_\_\_\_
- 10. \_\_\_\_\_
- 11. \_\_\_\_\_
- 12. \_\_\_\_\_
- 13. \_\_\_\_\_
- 14. \_\_\_\_\_
- 15. \_\_\_\_\_



Determine the area. Each  $\square = 1$  square unit ( $u^2$ ).



Answers

1. 32  $u^2$

2. 49  $u^2$

3. 60  $u^2$

4. 56  $u^2$

5. 50  $u^2$

6. 12  $u^2$

7. 80  $u^2$

8. 21  $u^2$

9. 40  $u^2$

10. 4  $u^2$

11. 36  $u^2$

12. 42  $u^2$

13. 6  $u^2$

14. 30  $u^2$

15. 24  $u^2$